



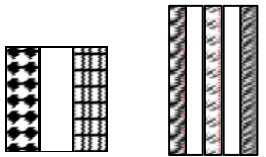




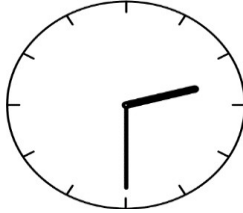













MONDAY	TUESDAY	WEDNESDAY	THURSDAY	FRIDAY
	Return your completed calendars August 19th for a fun surprise!			
3 School starts on August 14. How many days until school starts?	4 Use mental math. <i>Think</i> each answer. Then write the answer in your notebook. $10 + 5$ minus $2 + 5 =$ _____ $4 + 4$ plus $4 + 5 =$ _____ $6 + 6$ minus $6 + 5 =$ _____	5 Measure your height in inches and weigh yourself in pounds. Record the results in notebook. 	6 Get on Reflex Math for 20 minutes. <a href="http://www.reflexmath.com">www.reflexmath.com</a> <u>or</u> ask your parents to download the app!	7 Write your phone number. Add the digits. Do the same thing for a friend's phone number. What is the difference between your numbers?
10 Lunch is at noon. It lasts 55 minutes. What time is lunch over?	11 My digits are 6, 0, and 3. I'm less than 350. My first number is not zero, what number am I? My digits are 6, 8, and 2. I'm more than 700 but less than 850. What number am I?	12 Round the following numbers to the nearest ten, hundred, and thousand 6,567   8,294   2,016	13 Get on Reflex Math for 20 minutes. 	14 There are 12 months in a year. How many months have you lived? 
17 Write the fraction for the white section of each figure. 	18 Write these amounts in dollars and cents: 1) four dollars and nine pennies 2) five dollars, one dime, and seven pennies 3) one dollar, 3 nickels, 12 pennies	19 How much does each half equal? $\frac{1}{2}$ of a dozen apples $\frac{1}{2}$ of an hour $\frac{1}{2}$ of a day	20 Get on Reflex Math for 20 minutes. 	21 Draw a clock in your notebook and draw the time shown below on it. 10:47
25 Which numbers have a 7 in the hundreds place? a) 972 b) 761 c) 765 d) 507	26 Write the related facts for these fact families: 15, 7, 8 19, 2, 21 16, 9, 25	27 If the area of a square is 25 square units, what is the perimeter of the square? Draw the square to help you.	27 Get on Reflex Math for 20 minutes. 	28 Write the number that is 625 fewer than 2,014 195 fewer than 3,058 565 fewer than 7,006 885 fewer than 9,000

MONDAY	TUESDAY	WEDNESDAY	THURSDAY	FRIDAY
1 If you have 2 gallons of chocolate ice cream and 2 pints of vanilla ice cream, which ice cream do you have more of to eat?	2 How many 25s are in 200? How many quarters (25¢) are in \$2 (200¢)?	3 Get on Reflex Math for 20 minutes. 	4 Happy 4th of July! Count all of the American flags you see today. 	5 Write the following in your notebook. Fill in the missing numbers. _,_,_,72,74,76,_,_ _,_,_,50,52,54,_,_
8 Find each sum or difference. Watch the signs! <div style="border: 1px solid black; padding: 5px; width: fit-content;"> <math display="block">\begin{array}{r} 388 \quad 400 \quad 804 \quad 986 \\ +174 \quad -178 \quad -347 \quad +285 \end{array}</math> </div>	9 Write the related facts for these fact families: 6,9,14 5,9,14 7,5,13      11,8,19	10 What time is it on this clock? 	11 Get on Reflex Math for 20 minutes. 	12 Write the standard and expanded form of these numbers: 1) five thousand, eight hundred six 2) seventy-three thousand, six hundred fifty-four
15 How many ways can you make 38¢ using pennies, nickels, and dimes?	16 Draw these items: How many wheels in all? <div style="display: flex; align-items: center;"> <div style="border: 1px solid black; padding: 5px; margin-right: 10px;">           7 motorcycles 5 cars 6 tricycles         </div>  </div>	17 Use this code: a=1, b=2, c=3, d=4, e=5, f=6, g=7, h=8, i=9, j=10 ... Z=26. How much is this question worth?	18 Get on Reflex Math for 20 minutes. 	19 List all the math words you can. Give an example and illustration of each. addition $4 + 2$ hexagon 
22 Count by 10s from 100 to 200. Write the numbers as you say them. How many tens does it take to make 100?	23 Using pictures of base ten blocks, draw a picture that shows six hundred seventy eight. 	24 Round these numbers to the nearest ten, hundred, and thousand. 1) 44,072      2) 65,987 3) 20,787      4) 10,098	25 Get on Reflex Math for 20 minutes. 	26 Find the difference. Check your answer with addition. <div style="display: flex; justify-content: space-around;"> <math display="block">\begin{array}{r} 894 \\ -817 \\ \hline \end{array}</math> <math display="block">\begin{array}{r} 953 \\ - \quad 9 \\ \hline \end{array}</math> <math display="block">\begin{array}{r} 502 \\ -363 \\ \hline \end{array}</math> <math display="block">\begin{array}{r} 600 \\ - \quad 61 \\ \hline \end{array}</math> </div>
29 Write the number that is: 837 more than 1,208 983 more than 66,629 527 more than 26,176 300 more than 1,451 3,000 more than 1,451	30 Write the fraction that tells how much of this trapezoid is <i>not</i> white. 			

August 2019

Entering 3rd Grade

Summer Math Fun

MONDAY	TUESDAY	WEDNESDAY	THURSDAY	FRIDAY
			<p>1 Get on Reflex Math for 20 minutes.</p> 	<p>2 Write the number that has a 4 in the tens place, a 6 in the thousands place, a 7 in the hundreds place, and an 8 in the ten thousands place. Don't forget the ones place!</p>
<p>5 Measure your kitchen table. What is the perimeter and area?</p>	<p>6 Decompose the following numbers: 1) 9,649    2) 4,087 3) 6,825    4) 7,905</p>	<p>7 Divide your paper into 4 equal parts. Draw a clock face in each part. Show the times you: 1) get up 2) go to bed 3) 45 minutes before you go to bed, 4) 30 minutes after you get up.</p>	<p>8 Get on Reflex Math for 20 minutes.</p> 	<p>9 Measure your height and weight and record them. Look at your notebook page for June 5. How much have you grown?</p>
<p>12 Count how many math activities you did this summer. Write the number in your notebook. What was your favorite activity?</p>	<p>13 Put your first and last name on the front of your notebook. Put 3rd Grade on the front of your notebook. Take the notebook to your teacher tomorrow!</p>	<p>14 First day of school!</p> 		
		<p>Great work! You are ready for 3rd grade! Be sure to turn your notebook in by August 19th.</p> 